



Water







Let's be sustainable

www.kesab.asn.au/sawater

How full?

Name: _____

Look at the buckets below. They are empty and need to be filled up. Colour them in to show the amount of millilitres in each bucket.

 <p>600 ml 500 ml 400 ml 300 ml 200 ml 100 ml 0 ml</p> <p>200 millilitres</p>	 <p>600 ml 500 ml 400 ml 300 ml 200 ml 100 ml 0 ml</p> <p>400 millilitres</p>	 <p>600 ml 500 ml 400 ml 300 ml 200 ml 100 ml 0 ml</p> <p>300 millilitres</p>
 <p>600 ml 500 ml 400 ml 300 ml 200 ml 100 ml 0 ml</p> <p>100 millilitres</p>	 <p>600 ml 500 ml 400 ml 300 ml 200 ml 100 ml 0 ml</p> <p>250 millilitres</p>	 <p>600 ml 500 ml 400 ml 300 ml 200 ml 100 ml 0 ml</p> <p>550 millilitres</p>